

Day: _____

Date: _____


Activity 19

Tick the correct time?

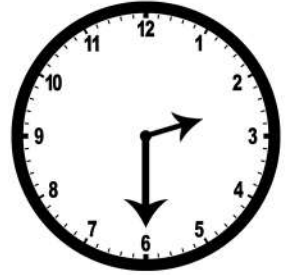
Point and read



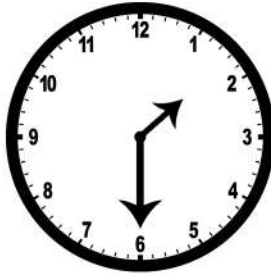
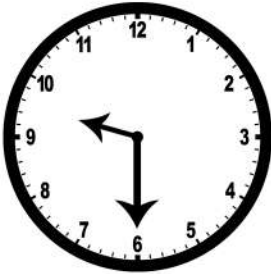
Which clock shows 12:00



Which clock shows 2:30



Which clock shows 9:30



Which clock shows 3:00



Which clock shows 7:30



Which clock shows 8:00

