

Day: _____

Date: _____



Activity 22

Tick the correct times.

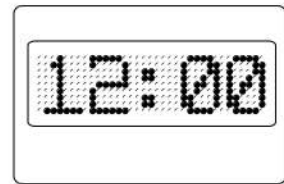
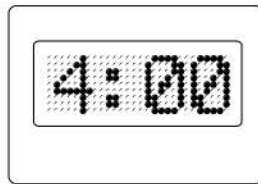
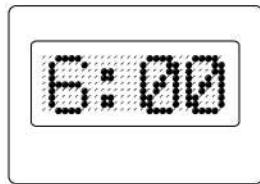
Point and read




Which of these clocks shows the time 5 o'clock?



Which of these clocks shows the time 12 o'clock?



Which of these clocks shows the time 8 o'clock?



Which of these clocks shows the time 11 o'clock?

