

Day: \_\_\_\_\_

Date: \_\_\_\_\_


# Activity 28

Count and write the number of fruits in the boxes above each image. Subtract the numbers and write the answer in the last box.

Point and read




3



-

2



=

1



-



=




-



=



-



=

