

Day: \_\_\_\_\_

Date: \_\_\_\_\_

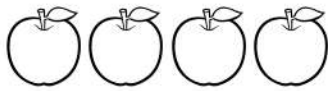
# Activity 27

Write the addition sentence that matches each picture.

Point and read




$$\text{---} + \text{---} = \text{---}$$




$$\text{---} + \text{---} = \text{---}$$





$$\text{---} + \text{---} = \text{---}$$



$$\text{---} + \text{---} = \text{---}$$



$$\text{---} + \text{---} = \text{---}$$



$$\text{---} + \text{---} = \text{---}$$

