


Day: \_\_\_\_\_

Date: \_\_\_\_\_

# Activity 25

Count and write the weight of each object.

Point and read




The baby weighs \_\_\_\_\_ kg.



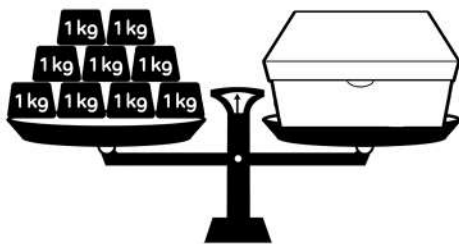
The pair of shoes weighs \_\_\_\_\_ kg.




The pumpkin weighs \_\_\_\_\_ kg.



The ice bucket weighs \_\_\_\_\_ kg.



The box weighs \_\_\_\_\_ kg.



The water bottle weighs \_\_\_\_\_ kg.

Which object is the heaviest? \_\_\_\_\_

Which object is the lightest? \_\_\_\_\_

