

Day: _____

Date: _____

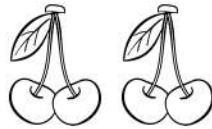
Activity 15

Word Problems

Point and read



- 1) Mary has 3 bananas and 4 cherries.
How many fruits does she have in all?



+

=



- 2) There are 4 orange slices in a plate. Pam adds 4 more.
How many orange slices are there in the plate now?



+

=

- 3) Tina has 5 candies. Rosy has 4 candies.
How many candies do they have in all?



+

=

