

Day: \_\_\_\_\_

Date: \_\_\_\_\_

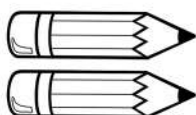

# Activity 14

## Word Problems

Point and read





1) Tom has 3 yellow pencils and 2 red pencils.  
How many pencils does he have?





$$\square + \square = \square$$

2) There 4 roses and 2 sunflowers in my garden.  
How many flowers are there in all?



$$\square + \square = \square$$

3) 5 boys were playing in the playground.  
3 girls also join in. How many kids are there?



$$\square + \square = \square$$