

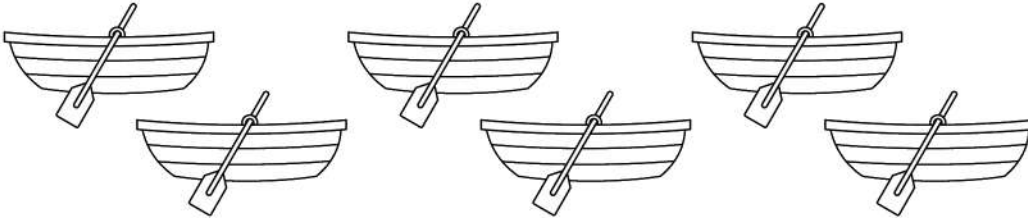
Day: \_\_\_\_\_

Date: \_\_\_\_\_

# Activity 28

Complete the picture. Draw. Count how many in all.


Point and read



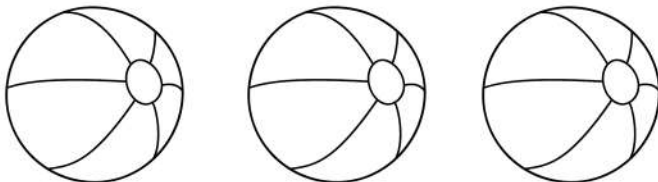
6 boats. Add 2 more.



5 shells. Add 2 more.



7 fish. Add 2 more.



3 balls. Add 2 more.

