

Day: \_\_\_\_\_

Date: \_\_\_\_\_


# Activity 30

## Addition stories.

Point and read




I have 4 pencils.  
Jack has 7 pencils.  
How many pencils  
do Jack and I have altogether?




Answer:

A squirrel has 9 nuts.  
He finds 8 more.  
How many nuts does he have now?



Answer:

There are 9 bees in the hive.  
4 more fly in.  
How many bees are  
in the hive in all?



Answer:

Dad gives Max 6 treats.  
I give him 7 treats.  
How many treats did Max get?



Answer:

