

Day: \_\_\_\_\_

Date: \_\_\_\_\_

# Activity 24

## Heavy vs Light

Point and read



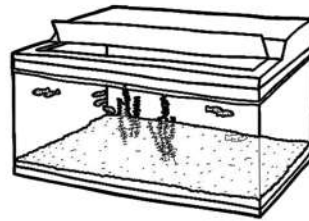
Tick the correct choice that best describes the weight of each object.

1)



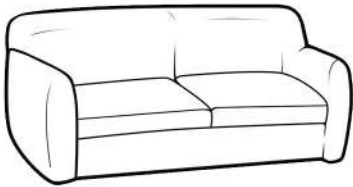
Heavy  Light

2)




Heavy  Light

3)



Heavy  Light

4)



Heavy  Light

5)



Heavy  Light

6)



Heavy  Light

